

Resistors

This worksheet and all related files are licensed under the Creative Commons Attribution License, version 1.0. To view a copy of this license, visit <http://creativecommons.org/licenses/by/1.0/>, or send a letter to Creative Commons, 559 Nathan Abbott Way, Stanford, California 94305, USA. The terms and conditions of this license allow for free copying, distribution, and/or modification of all licensed works by the general public.

Resources and methods for learning about these subjects (list a few here, in preparation for your research):

Questions

Question 1

Shown here is the schematic symbol for a *resistor*:



What is the purpose of a resistor? What function does it perform? Also, draw an illustration of what a real resistor looks like.

[file 00059](#)

Question 2

Resistors are sometimes represented in electrical and electronic schematic diagrams by a symbol other than this:

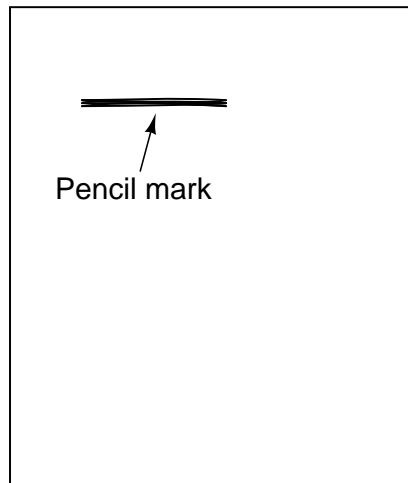


Draw this other symbol next to the one shown above.

[file 00060](#)

Question 3

A primitive resistor may be formed by sketching a thick line on a piece of paper, using a pencil (not an ink pen!):



How may the end-to-end electrical resistance of this pencil mark be increased? How may it be decreased? Explain your answers.

[file 00212](#)

Question 4

When a resistor conducts electric current, its temperature increases. Explain how this phenomenon is significant to the application of resistors in electric circuits. In other words, why would we care about a resistor's temperature increasing?

Also, what does this indicate about the technical ratings of resistors? Aside from having a specific resistance rating (i.e. a certain number of *ohms*), what other rating is important for proper selection of resistors in electric circuits?

[file 00214](#)

Question 5

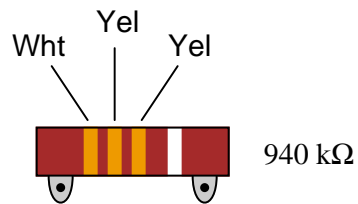
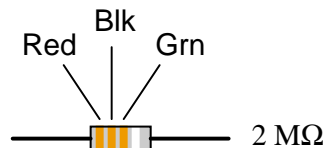
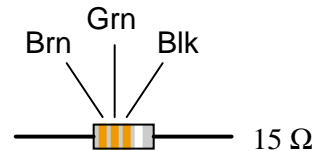
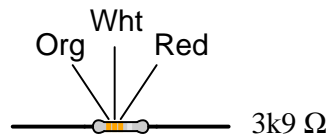
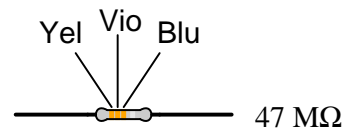
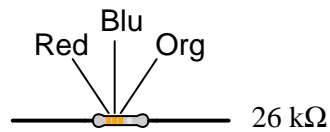
Many resistors have their electrical resistance shown by a set of color codes, or "bands," imprinted around their circumference. A standard color code associates each color with a specific decimal digit (0 through 9). Associate each of the following digits with its respective color:

- 0 =
- 1 =
- 2 =
- 3 =
- 4 =
- 5 =
- 6 =
- 7 =
- 8 =
- 9 =

[file 00215](#)

Question 6

Observe the following "4-band" resistors, their color codes, and corresponding resistance values (note that the last color band is omitted, since it deals with precision and not nominal value):



What patterns do you notice between the color codes (given as three-letter abbreviations, so as to avoid interpretational errors resulting from variations in print quality), the resistance values, and the physical sizes of the resistors?

[file 00216](#)

Question 7

What does the *last* color band represent on a color-coded resistor?

[file 00217](#)

Question 8

Determine the nominal resistance values of these resistors, given their band colors, and also express the allowable tolerance in ohms.

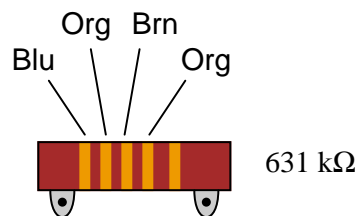
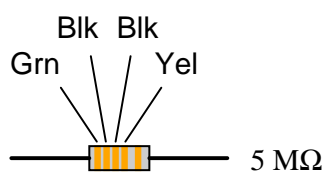
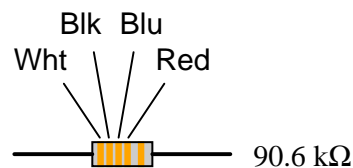
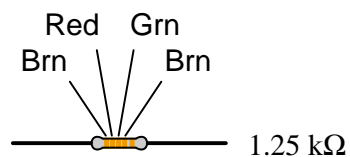
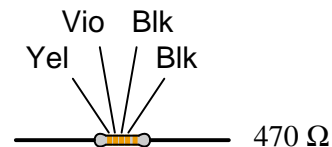
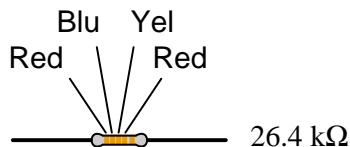
For example, a 25 kΩ resistor with a 10% tolerance rating would have an allowable tolerance of +/- 2.5 kΩ.

- Red, Org, Blu, Gld =
- Brn, Blk, Grn, Sil =
- Blu, Blk, Brn, Gld =
- Yel, Vio, Red, Sil =
- Grn, Brn, Yel =
- Wht, Blu, Blk, Sil =
- Gry, Grn, Org, Gld =
- Org, Org, Gld =
- Vio, Red, Sil, Gld =
- Brn, Red, Blk, Sil =

[file 00264](#)

Question 9

Observe the following "5-band" precision resistors, their color codes, and corresponding resistance values (note that the last color band is omitted, since it deals with precision and not nominal value):



What patterns do you notice between the color codes (given as three-letter abbreviations, so as to avoid interpretational errors resulting from variations in print quality) and the resistance values of each resistor? Why do precision resistors use a "5-band" color code instead of a "4-band" color code?

[file 00265](#)

Question 10

Determine whether or not the following resistors measure within the resistance range specified by their color codes:

- (Org, Org, Red, Blk, Blu) Measured resistance = 332.5Ω
- (Brn, Blk, Blk, Gld, Red) Measured resistance = 9.7Ω
- (Blu, Vio, Brn, Red, Grn) Measured resistance = $67.43 \text{ k}\Omega$
- (Red, Wht, Grn, Yel, Vio) Measured resistance = $2.949 \text{ M}\Omega$
- (Yel, Vio, Org, Gld) Measured resistance = $44.68 \text{ k}\Omega$
- (Gry, Red, Brn, Sil) Measured resistance = 905Ω
- (Grn, Blu, Gld) Measured resistance = 6.73Ω
- (Vio, Brn, Red, Gld, Brn) Measured resistance = 70.82Ω
- (Wht, Org, Blu, Brn, Grn) Measured resistance = $9.38 \text{ k}\Omega$
- (Red, Blk, Wht, Grn, Vio) Measured resistance = $20.86 \text{ M}\Omega$

Assume that all five-band resistors listed here use the *precision* color code as opposed to the military 5-band code where the fifth band indicates resistor reliability.

[file 00266](#)

Question 11

Find one or two real resistors and bring them with you to class for discussion. Identify as much information as you can about your resistors prior to discussion:

- Resistance (ideal)
- Resistance (actual)
- Power rating
- Type (carbon composition, metal film, wire-wound, etc.)

[file 01150](#)


Answers

Answer 1

The purpose of a *resistor* is to provide a precise amount of electrical resistance in a circuit. Here is an illustration of a small (1/8 or 1/4 watt) resistor:



It is also good to know that the zig-zag symbol shown in the question is not the only symbol used to represent resistors. Another common resistor symbol is shown here:



Answer 2

Alternative symbols for a resistor



Answer 3

The electrical resistance of a pencil mark may be increased by increasing its length. It may be decreased by increasing its width.

Answer 4

The heating effect of electricity through a resistance is significant because that resistance may be damaged by excessive temperature. To avoid damage, resistors must be selected to be able to withstand a certain amount of heating.

Answer 5

- 0 = Black
- 1 = Brown
- 2 = Red
- 3 = Orange
- 4 = Yellow
- 5 = Green
- 6 = Blue
- 7 = Violet
- 8 = Grey
- 9 = White

Answer 6

The first three color "bands" for all these four-band resistors denote two digits and a "multiplier" value, respectively. Physical size has no relation to resistance.

Follow-up question: what does the physical size of a resistor represent, if not resistance?

Answer 7

There is more than one answer to this question! On some resistors, the last band represents the *tolerance* (also known as *precision*) for that resistor, expressed as a percentage. On other resistors, the last band represents a *reliability* rating for that resistor.

Answer 8

- Red, Org, Blu, Gld = 23 M Ω , +/- 1.15 M Ω
- Brn, Blk, Grn, Sil = 1 M Ω , +/- 100 k Ω
- Blu, Blk, Brn, Gld = 600 Ω , +/- 30 Ω
- Yel, Vio, Red, Sil = 4.7 k Ω , +/- 470 Ω
- Grn, Brn, Yel = 510 k Ω , +/- 102 k Ω
- Wht, Blu, Blk, Sil = 96 Ω , +/- 9.6 Ω
- Gry, Grn, Org, Gld = 85 k Ω , +/- 4.25 k Ω
- Org, Org, Gld = 3.3 Ω , +/- 0.66 Ω
- Vio, Red, Sil, Gld = 0.72 Ω , +/- 0.036 Ω
- Brn, Red, Blk, Sil = 12 Ω , +/- 1.2 Ω

Answer 9

The first three color "bands" for precision five-band resistors denote three digits and a "multiplier" value, respectively. A five-band color code is necessary to express resistance with a greater number of significant digits than a four-band code.

Answer 10

- (Org, Org, Red, Blk, Blu) Measured resistance = 332.5 Ω *Within tolerance*
- (Brn, Blk, Blk, Gld, Red) Measured resistance = 9.7 Ω **Out of tolerance!**
- (Blu, Vio, Brn, Red, Grn) Measured resistance = 67.43 k Ω *Within tolerance*
- (Red, Wht, Grn, Yel, Vio) Measured resistance = 2.949 M Ω *Within tolerance*
- (Yel, Vio, Org, Gld) Measured resistance = 44.68 k Ω *Within tolerance*
- (Gry, Red, Brn, Sil) Measured resistance = 905 Ω **Out of tolerance!**
- (Grn, Blu, Gld) Measured resistance = 6.73 Ω **Out of tolerance!**
- (Vio, Brn, Red, Gld, Brn) Measured resistance = 70.82 Ω *Within tolerance*
- (Wht, Org, Blu, Brn, Grn) Measured resistance = 9.38 k Ω *Within tolerance*
- (Red, Blk, Wht, Grn, Vio) Measured resistance = 20.86 M Ω **Out of tolerance!**

Answer 11

If possible, find a manufacturer's datasheet for your components (or at least a datasheet for a similar component) to discuss with your classmates.

Be prepared to *prove* the actual resistance of your resistors in class, by using a multimeter!

Notes

Notes 1

Students may (properly) ask, "Why is there such a thing as a component whose sole purpose is to *impede* the flow of electrons?" While resistors may seem rather pointless at first, they end up being extremely valuable electrical/electronic components. If asked, you may cite several uses of resistors in circuits:

- To limit maximum circuit current to a safe value.
 - To "split" a voltage into proportions.
 - To "scale" meter movements, for precise measurement of current and voltage.
 - To provide a non-shorting path to discharge static electricity.
-

Notes 2

It might be a good idea to occasionally draw schematic diagrams for your students using the "other" resistor symbol, just so they are not taken by surprise when they see this symbol in real schematics. Just be sure to remain consistent in your symbolism within each diagram: never mix the two different symbols within the same schematic!

Notes 3

Creating a resistor on paper using a pencil is a very easy experiment to perform, the resistance of which may be measured with an ohmmeter. I strongly recommend this as a classroom exercise!

Notes 4

Students need to understand that resistance alone does not fully dictate the selection of a resistor for electrical service. Failure to heed the dissipation ratings of a resistor can result in catastrophic failure!

A good follow-up question to this is to ask what the *unit of measurement* is for this kind of thermal rating.

Notes 5

Several limericks have been invented to remember this color code, most of them "politically incorrect." I often challenge students to invent their own limericks for remembering this color code, and screen the inappropriate creations from general class discussion.

Notes 6

The normal way to teach students the resistor color code is to show them the code first, then show them some resistors. Here, the sequence is reversed: show the students some resistors, and have them figure out the code. An important cognitive skill is the ability to detect and apply patterns in sets of data. Exercises such as this help build that skill.

Notes 7

This question is worded simply and directly enough that students might think there is only one right answer. However, upon doing some research they should find that there is more involved than one simple answer can encompass! Discuss with your students the different color code types, and what applications one might find resistors with "reliability" color codes in.

Regarding precision, nothing in life is perfectly accurate. However, the absence of perfect accuracy does not necessarily imply total uncertainty. In science, especially, it is important that all data be qualified by a statement of precision (or tolerance). Your students may be familiar with "margins of error" stated for public opinion polls. With resistors, this "margin of error" (expression of uncertainty) is explicitly given in the form of a separate color band.

Notes 8

This question serves as a great review for the mathematical concepts of scientific notation and percentages. Challenge your students to perform all the math without using a calculator, and without writing anything!

Notes 9

The normal way to teach students the resistor color code is to show them the code first, then show them some resistors. Here, the sequence is reversed: show the students some resistors, and have them figure out the code. An important cognitive skill is the ability to detect and apply patterns in sets of data. Exercises such as this help build that skill.

It should be noted that there is a 5-band color code for *non-precision* resistors as well, with the first four bands serving the same purpose as in a 4-band code, the extra band indicating resistor *reliability*. This scheme was developed for military purposes and is seldom seen in civilian circuitry.

Notes 10

This question serves as a great review for the mathematical concepts of scientific notation and percentages. They will have to calculate the allowable range of resistance values for each resistor in order to determine whether or not the measured value falls within that range.

Notes 11

The purpose of this question is to get students to kinesthetically interact with the subject matter. It may seem silly to have students engage in a "show and tell" exercise, but I have found that activities such as this greatly help some students. For those learners who are kinesthetic in nature, it is a great help to actually *touch* real components while they're learning about their function. Of course, this question also provides an excellent opportunity for them to practice interpreting color codes and/or component markings, use a multimeter, access datasheets, etc.